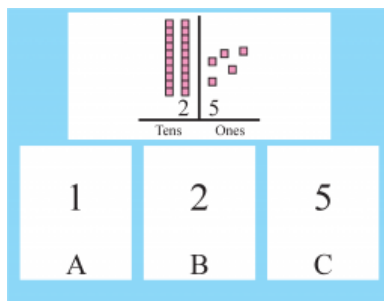


Skill 1

SM05AT1.1.1a_2019_T1:



Point as you say:

Here are some numbers.

(Point to 2 groups of 10 blocks) This is 20.

(Point to 5 single blocks) This is 5.

First Prompt

Correct Answer

Find how many groups of 10 are in 25.

B

Record student response to FIRST prompt.

2

If student answers incorrectly, continue with EXTRA prompt below.

Extra Prompt

Correct Answer

Find the groups of 10 blocks and count how many there are.

B

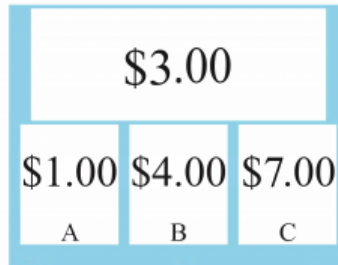
Find how many groups of 10 are in 25.

2

Record student response to EXTRA prompt and move on to next question.

Skill 2

SM05AT1.1.4a_2019_T1:



Point as you say:

Here are some amounts of money.

Here is \$3.00.

First Prompt

Correct Answer

Find the amount of money that is less than \$3.00.

A

\$1.00

Record student response to FIRST prompt.

If student answers incorrectly, continue with EXTRA prompt below.

Extra Prompt

Correct Answer

Find the smallest amount of money.

A

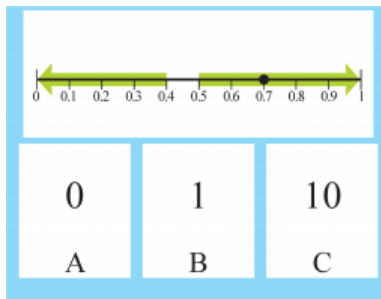
\$1.00

Find the amount of money that is less than \$3.00.

Record student response to EXTRA prompt and move on to next question.

Skill 3

SM05AT1.1.5a_2019_T1:



Point as you say:

Here is a number line from zero to one.

(Point to 0 - 0.4) These numbers round to 0.

(Point to 0.5 - 1) These numbers round to 1.

(Point to 0.7). Here is 0.7.

First Prompt

Correct Answer

Find the number 0.7 rounds to.

B

1

Record student response to FIRST prompt.

If student answers incorrectly, continue with EXTRA prompt below.

Extra Prompt

Correct Answer

(Point at 0.5) Numbers above 0.5 round up to 1.

B

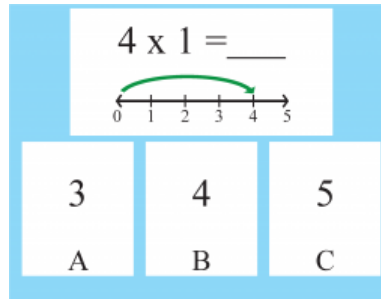
1

Find the number 0.7 rounds to.

Record student response to EXTRA prompt and move on to next question.

Skill 4

SM05AT2.1.1a_2019_T1:



Point as you say:

Here is a number line with a multiplication problem, 4 times 1.

First Prompt

Correct Answer

Find the answer to 4 times 1.

B

Record student response to FIRST prompt.

4

If student answers incorrectly, continue with EXTRA prompt below.

Extra Prompt

Correct Answer

Start at 0 and jump 4 spaces one time.

B

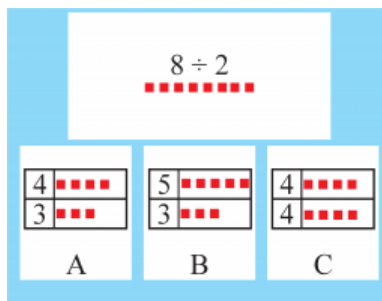
Find the answer to 4 times 1.

4

Record student response to EXTRA prompt and move on to next question.

Skill 5

SM05AT2.1.2a_2019_T1:



Point as you say:

**Here are some numbers with blocks that represent the numbers.
Here is 8 divided by 2.**

First Prompt

Correct Answer

Find the answer that shows 8 separated into 2 equal parts.

C

Record student response to FIRST prompt.

2 rows of 4 blocks

If student answers incorrectly, continue with EXTRA prompt below.

Extra Prompt

Correct Answer

Find the picture that shows the same number of blocks separated into 2.

C

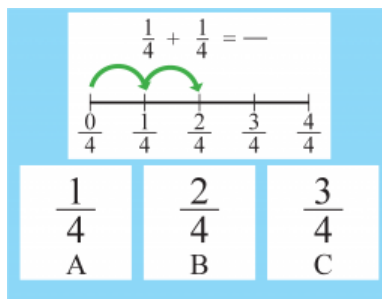
2 rows of 4 blocks

Find the answer that shows 8 separated into 2 equal parts.

Record student response to EXTRA prompt and move on to next question.

Skill 6

SM05AF1.1.1a_2019_T1:



Point as you say:

Here are some fractions.

Here is a number line with a math problem, one-fourth plus one-fourth.

First Prompt

Correct Answer

Find the answer to one-fourth plus one-fourth.

B

Record student response to FIRST prompt.

2/4

If student answers incorrectly, continue with EXTRA prompt below.

Extra Prompt

Correct Answer

Add the top numbers of the fractions and keep the bottom numbers the same to find the answer.

B

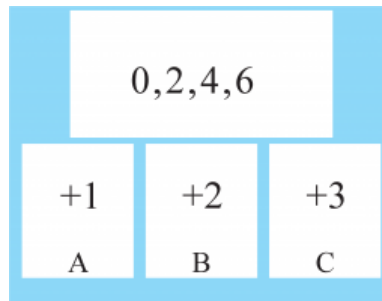
2/4

Find the answer to one-fourth plus one-fourth.

Record student response to EXTRA prompt and move on to next question.

Skill 7

SM05BO2.1.1a_2019_T1:



Point as you say:

Here are some numbers in a pattern.

First Prompt

Correct Answer

Find the rule this pattern follows.

B

Record student response to FIRST prompt.

+2

If student answers incorrectly, continue with EXTRA prompt below.

Extra Prompt

Correct Answer

Each number goes up by 2.

B

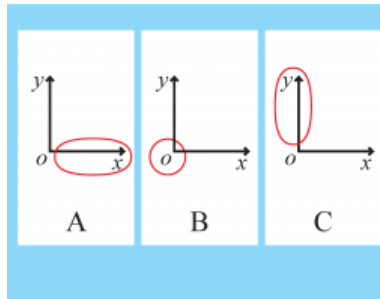
Find the rule this pattern follows.

+2

Record student response to EXTRA prompt and move on to next question.

Skill 8

SM05CG1.1.1a_2019_T1:



Point as you say:

Here are 3 graphs.

First Prompt

Correct Answer

Find the graph with the y-axis circled.

C

Record student response to FIRST prompt.

If student answers incorrectly, continue with EXTRA prompt below.

Extra Prompt

Correct Answer

The y-axis is the vertical line with the 'y' next to it.

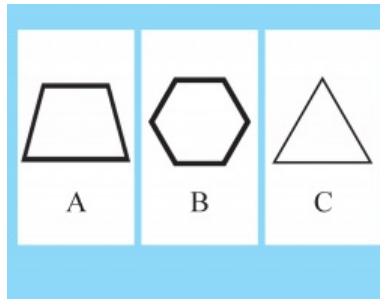
C

Find the graph with the y-axis circled.

Record student response to EXTRA prompt and move on to next question.

Skill 9

SM05CG2.1.1a_2019_T1:



Point as you say:

Here are 3 shapes.

First Prompt

Correct Answer

Find the shape with 4 sides.

A

trapezoid

Record student response to FIRST prompt.

If student answers incorrectly, continue with EXTRA prompt below.

Extra Prompt

Correct Answer

Find the shape with 4 sides by counting.

A



trapezoid

Find the shape with 4 sides.

Record student response to EXTRA prompt and move on to next question.

Skill 10

SM05DM1.1.1a_2019_T1:

		A) 2
pints	cups	B) 4
1	2	C) 9
2	4	

Point as you say:

Here are some numbers.

Here is a table showing how many cups are in different numbers of pints.

First Prompt

Correct Answer

Find the number of cups in 2 pints.

B

4

Record student response to FIRST prompt.

If student answers incorrectly, continue with EXTRA prompt below.

Extra Prompt

Correct Answer

(Point at chart) There are 2 cups in 1 pint. Find how many cups are in 2 pints.

B

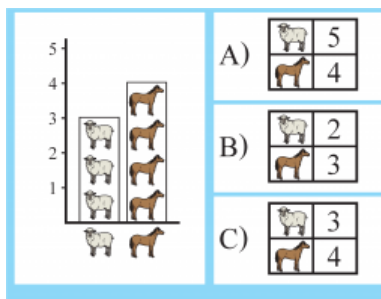
4

Find the number of cups in 2 pints.

Record student response to EXTRA prompt and move on to next question.

Skill 11

SM05DM2.1.2a_2019_T1:



Point as you say:

Here is a line plot showing the number of sheep and horses on a farm.

First Prompt

Correct Answer

Find the table that shows the same information as the line plot.

C

Record student response to FIRST prompt.

3 sheep, 4 horses

If student answers incorrectly, continue with EXTRA prompt below.

Extra Prompt

Correct Answer

The line plot shows 3 sheep and 4 horses.

C

Find the table that shows the same information as the line plot.

3 sheep, 4 horses

Record student response to EXTRA prompt and move on to next question.